


Name _____

1 Here is a clock.



Use the words to complete the sentences.

minute

hour

day

time

The shortest hand is the _____ hand.

The longest hand is the _____ hand.

2 marks

2 Complete.


There are _____ minutes in an hour.

There are _____ minutes in a quarter of an hour.

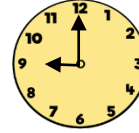
There are _____ minutes in half an hour.

3 marks


3 Match the clocks to the correct times.




9 o'clock



5 past 6



Half past 1



Quarter to 12

3 marks

4 Order the times from shortest to longest.

1 hour
10 minutes

Three
quarters of
an hour

55 minutes

A

B

C

Shortest

Longest

1 mark

