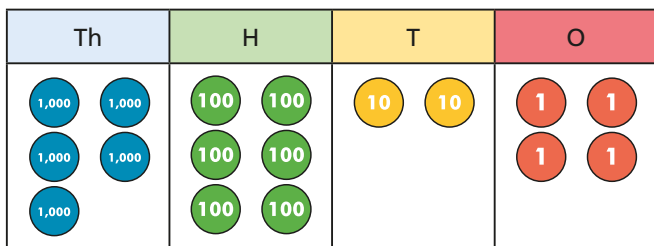


1 Use the place value chart to work out $5,624 - 2,301$



Complete the calculation.

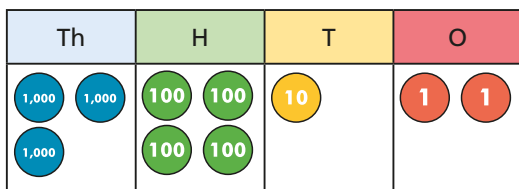
	Th	H	T	O
	5	6	2	4
-	2	3	0	1

What is the same about the representations?
What is different?



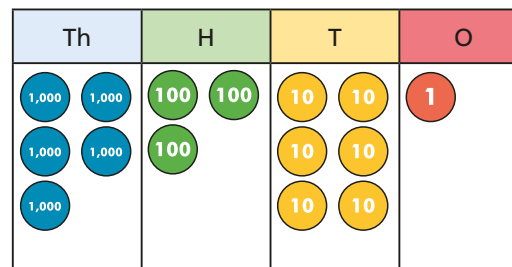
2 Use the place value charts to complete the calculations.

a) $3,412 - 1,201$



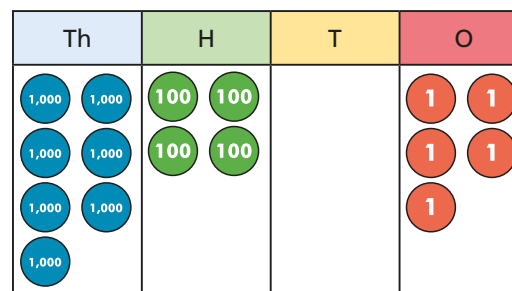
	Th	H	T	O
	3	4	1	2
-	1	2	0	1

b) $5,361 - 3,241$



	Th	H	T	O
	5	3	6	1
-	3	2	4	1

c) $7,405 - 404$



	Th	H	T	O
	7	4	0	5
-		4	0	4

3 Complete the calculations.

a)

	Th	H	T	O
	9	3	1	6
-	7	2	0	5

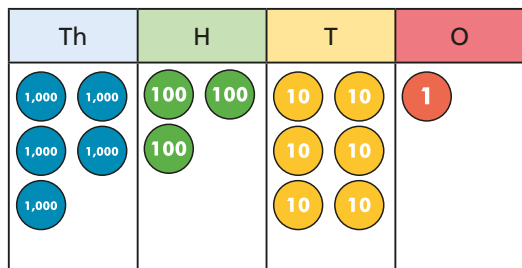
c)

	Th	H	T	O
	4	9	2	7
-		3	1	5

b)

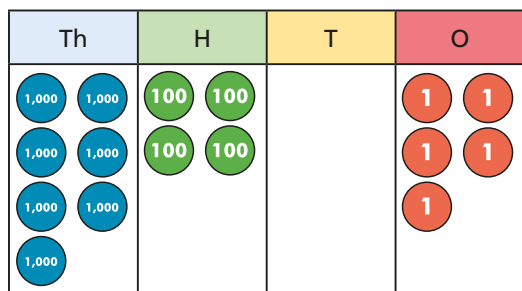
	Th	H	T	O
	8	0	6	1
-	3	0	6	0

b) $5,361 - 3,241$



	Th	H	T	O
	5	3	6	1
-	3	2	4	1

c) $7,405 - 404$



	Th	H	T	O
	7	4	0	5
-		4	0	4

3 Complete the calculations.

a)

	Th	H	T	O
	9	3	1	6
-	7	2	0	5

c)

	Th	H	T	O
	4	9	2	7
-		3	1	5

b)

	Th	H	T	O
	8	0	6	1
-	3	0	6	0

4 Aisha is calculating $7,585 - 316$

	Th	H	T	O
	7	5	8	5
-	3	1	6	
	4	4	2	5

$$7,585 - 316 = 4,425$$

Do you agree with Aisha? Explain your answer.

5 Work out the subtractions. Show your workings.

a) $6,205 - 104$

c) $5,371 - 3,260$

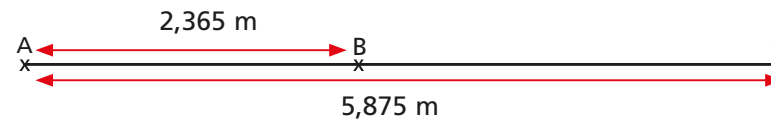
b) $3,749 - 1,642$

d) $9,853 - 853$

6 The distance from A to B is 2,365 m.

The distance from A to C is 5,875 m in the same direction.

How far is C from B?



7 Whitney and Ron are playing a game.

Whitney has 1,353 points.

Ron has 230 points fewer than Whitney.

How many points do they have altogether?